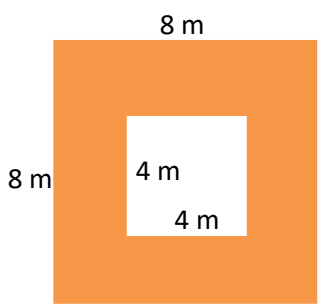
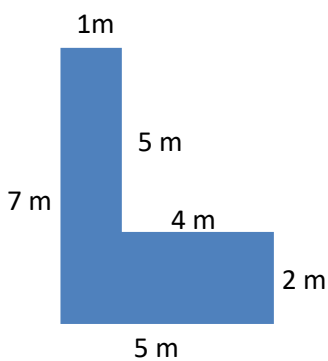

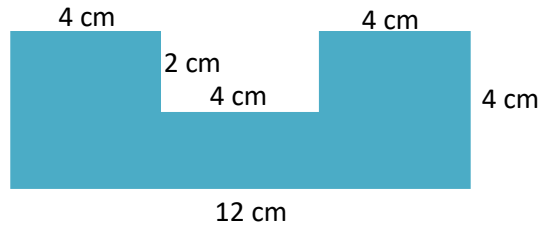
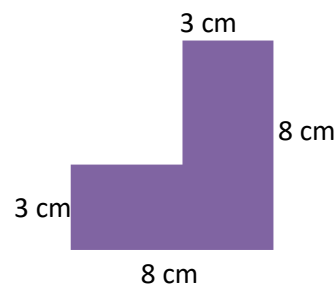
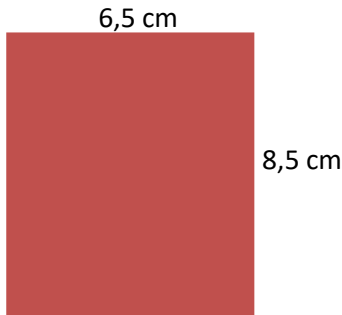


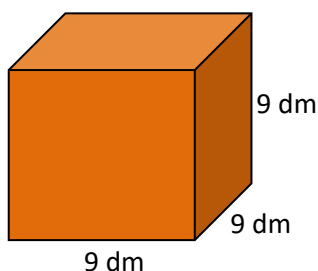
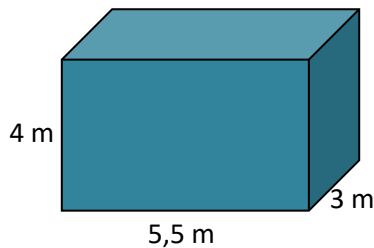
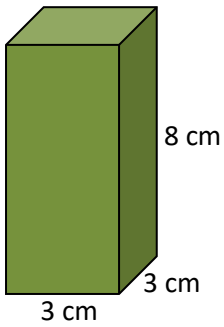
Bereken de oppervlakte en omtrek.



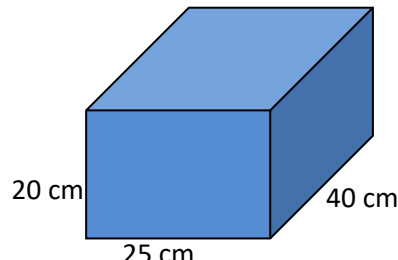
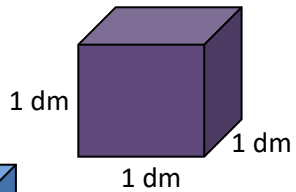
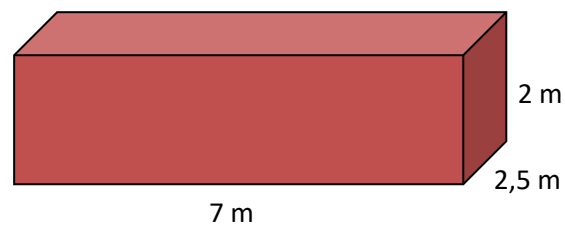
Bereken de oppervlakte en omtrek.



Bereken de inhoud.



Bereken de inhoud in liters.



5

**METEN**

40 dam = ... dm

1,4 km = ... hm

3000 cm = ... dam

8,5 hm = ... m

7560 m = ... km



3,5 dm<sup>3</sup> = ... l

8 l = ... ml

95 cl = ... l

459 dl = ... l

17200 ml = ... l

**METEN**

6

280 dam<sup>2</sup> = ... hm<sup>2</sup>

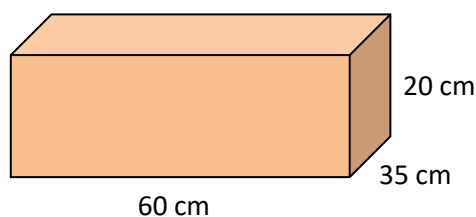
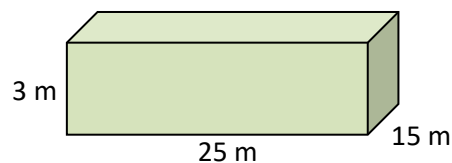
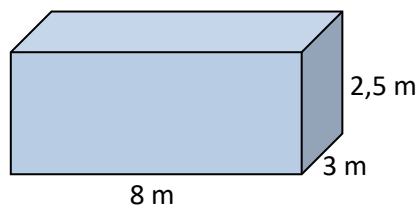
95 cm<sup>2</sup> = ... mm<sup>2</sup>

1,76 km<sup>2</sup> = ... ha

7,3 are = ... dm<sup>2</sup>

1600 cm<sup>2</sup> = ... m<sup>2</sup>

**Bereken de inhoud in liters.**



7

**METEN**

**METEN**

8